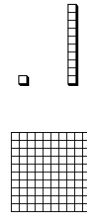
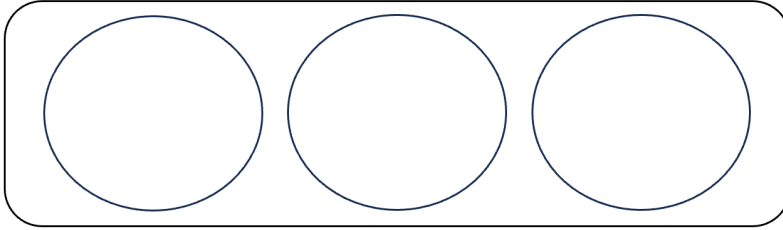


MA.3.NSO.2.3

# 3<sup>rd</sup> Grade FAST Test Prep Freebies

## PART A

Drag the place value blocks into the circle groups to model the expression  $3 \times 40$ .



## PART B

The product of 3 and 40 is

- 12
- 43
- 120

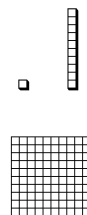
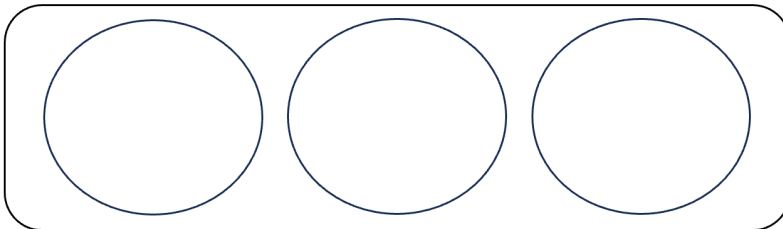


MA.3.NSO.2.3

# 3<sup>rd</sup> Grade FAST Test Prep Freebies

## PART A

Drag the place value blocks into the circle groups to model the expression  $3 \times 40$ .



## PART B

The product of 3 and 40 is

- 12
- 43
- 120