
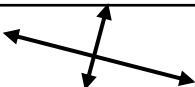



MA.3.GR.1.1

3rd Grade FAST Test Prep Freebies

Determine whether each set of intersecting lines are perpendicular, intersecting, or parallel.


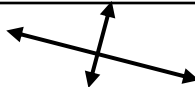

	Perpendicular	Intersecting (not perpendicular)	Parallel
	<input type="checkbox"/>	<input type="checkbox"/>	<input type="checkbox"/>
	<input type="checkbox"/>	<input type="checkbox"/>	<input type="checkbox"/>
	<input type="checkbox"/>	<input type="checkbox"/>	<input type="checkbox"/>



MA.3.GR.1.1

3rd Grade FAST Test Prep Freebies

Determine whether each set of intersecting lines are perpendicular, intersecting, or parallel.

	Perpendicular	Intersecting (not perpendicular)	Parallel
	<input type="checkbox"/>	<input type="checkbox"/>	<input type="checkbox"/>
	<input type="checkbox"/>	<input type="checkbox"/>	<input type="checkbox"/>
	<input type="checkbox"/>	<input type="checkbox"/>	<input type="checkbox"/>